

NAME: _____

CATCH THE TRAIN


WE CAN'T MISS OUR TRAIN!

Read the train information and draw the time on the station clocks below.


Practice saying the time out loud.

DEPARTING CAIRNS

The Kuranda Scenic Railway train departs from Cairns Station at **8.30am**.




The train arrives at Kuranda Station at **10.25am**.



How long did the journey take from Cairns to Kuranda? _____ hours and _____ minutes.

DEPARTING KURANDA

The train departs Kuranda Station at **2.00pm**.



What time below does the train arrive back to Cairns Station?



Answer: _____